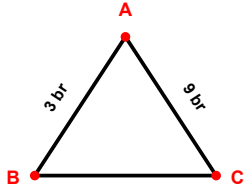
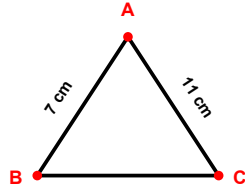


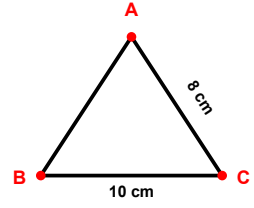
SORU: Aşağıdaki şekillerde verilen kenar uzunluklarının toplamını bulunuz.



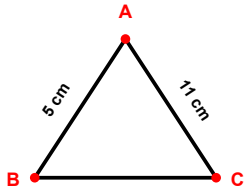
$$|CA| + |AB| = \dots$$



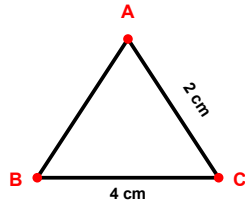
$$|AB| + |CA| = \dots$$



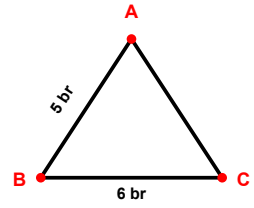
$$|BC| + |CA| = \dots$$



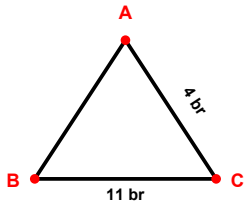
$$|AB| + |CA| = \dots$$



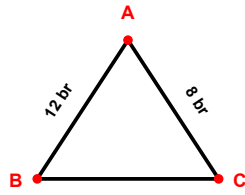
$$|BC| + |CA| = \dots$$



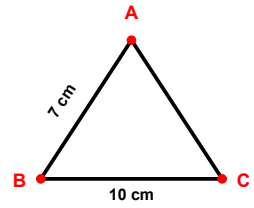
$$|AB| + |BC| = \dots$$



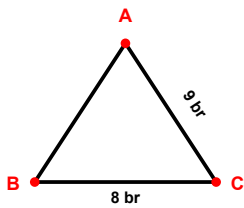
$$|BC| + |CA| = \dots$$



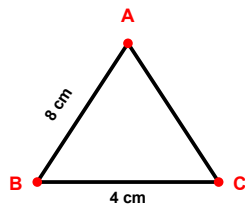
$$|AB| + |CA| = \dots$$



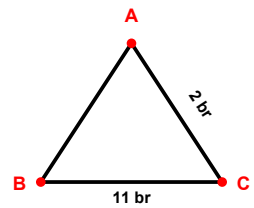
$$|AB| + |BC| = \dots$$



$$|CA| + |BC| = \dots$$

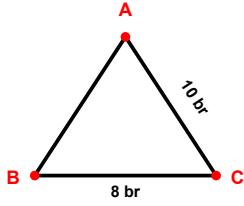


$$|AB| + |BC| = \dots$$

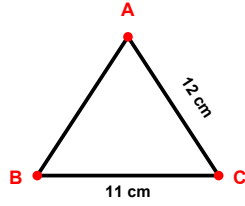


$$|BC| + |CA| = \dots$$

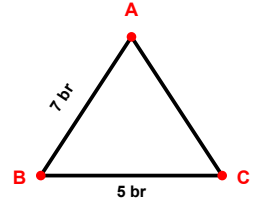
SORU: Aşağıdaki şekillerde verilen kenar uzunluklarının toplamını bulunuz.



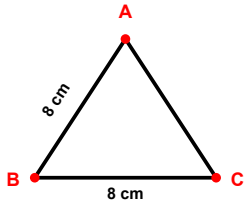
$$|CA| + |BC| = \dots$$



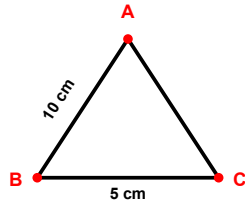
$$|BC| + |CA| = \dots$$



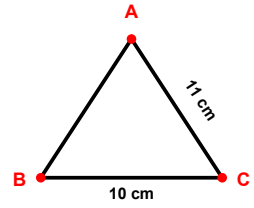
$$|BC| + |AB| = \dots$$



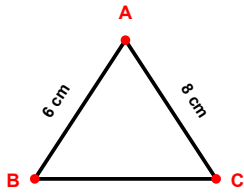
$$|AB| + |BC| = \dots$$



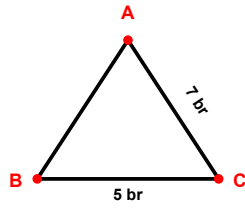
$$|AB| + |BC| = \dots$$



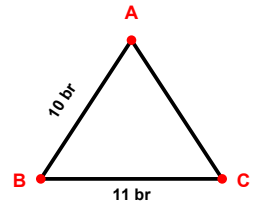
$$|CA| + |BC| = \dots$$



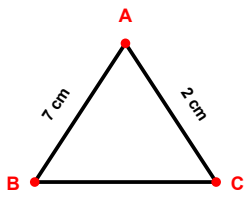
$$|CA| + |AB| = \dots$$



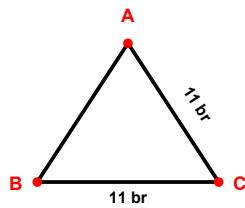
$$|BC| + |CA| = \dots$$



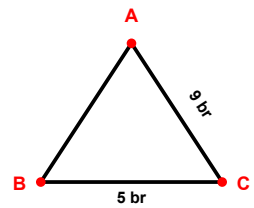
$$|BC| + |AB| = \dots$$



$$|CA| + |AB| = \dots$$

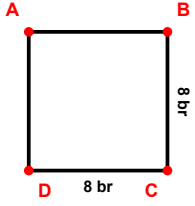


$$|BC| + |CA| = \dots$$

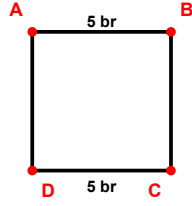


$$|CA| + |BC| = \dots$$

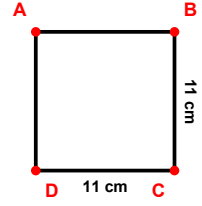
SORU: Aşağıdaki şekillerde verilen kenar uzunluklarının toplamını bulunuz.



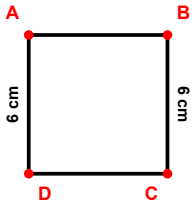
$$|CD| + |BC| = \dots$$



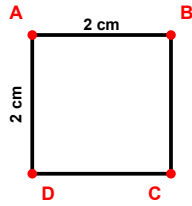
$$|CD| + |AB| = \dots$$



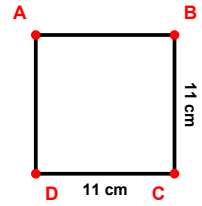
$$|CD| + |BC| = \dots$$



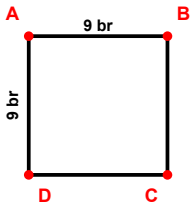
$$|DA| + |BC| = \dots$$



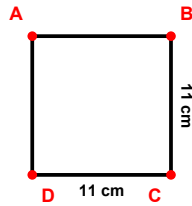
$$|DA| + |AB| = \dots$$



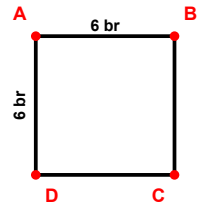
$$|CD| + |BC| = \dots$$



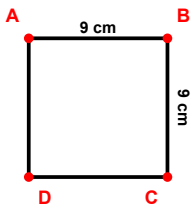
$$|DA| + |AB| = \dots$$



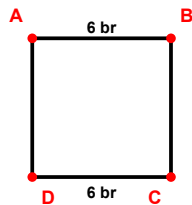
$$|BC| + |CD| = \dots$$



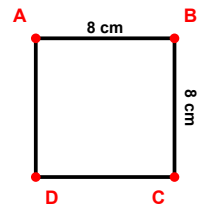
$$|AB| + |DA| = \dots$$



$$|BC| + |AB| = \dots$$

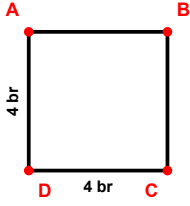


$$|AB| + |CD| = \dots$$

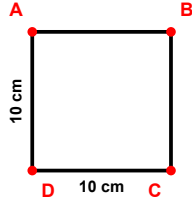


$$|AB| + |BC| = \dots$$

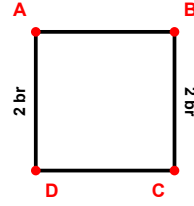
SORU: Aşağıdaki şekillerde verilen kenar uzunluklarının toplamını bulunuz.



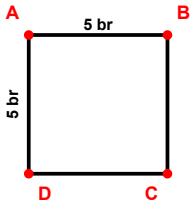
$$|CD| + |DA| = \dots$$



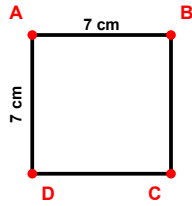
$$|DA| + |CD| = \dots$$



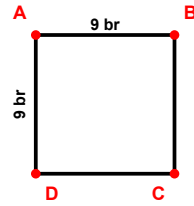
$$|DA| + |BC| = \dots$$



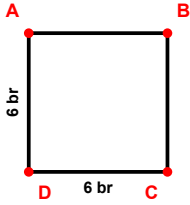
$$|AB| + |DA| = \dots$$



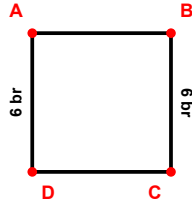
$$|DA| + |AB| = \dots$$



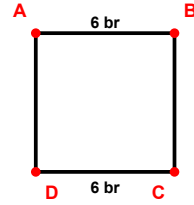
$$|DA| + |AB| = \dots$$



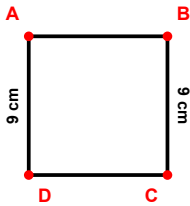
$$|CD| + |DA| = \dots$$



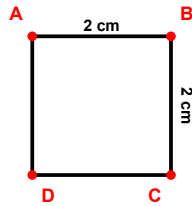
$$|BC| + |DA| = \dots$$



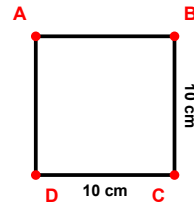
$$|AB| + |CD| = \dots$$



$$|BC| + |DA| = \dots$$

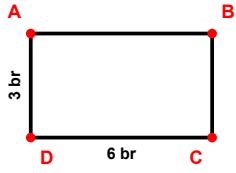


$$|AB| + |BC| = \dots$$

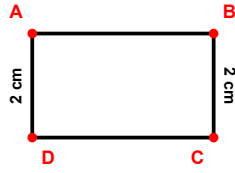


$$|BC| + |CD| = \dots$$

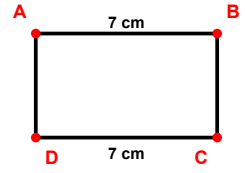
SORU: Aşağıdaki şekillerde verilen kenar uzunluklarının toplamını bulunuz.



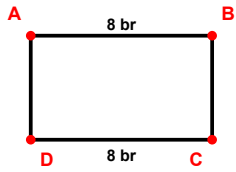
$$|CD| + |DA| = \dots$$



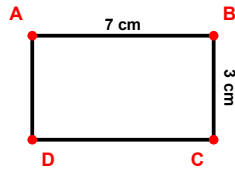
$$|DA| + |BC| = \dots$$



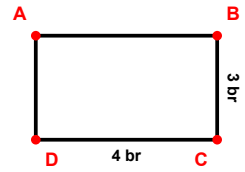
$$|CD| + |AB| = \dots$$



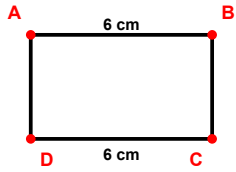
$$|AB| + |CD| = \dots$$



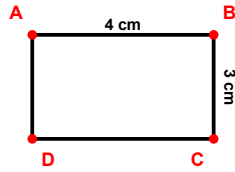
$$|BC| + |AB| = \dots$$



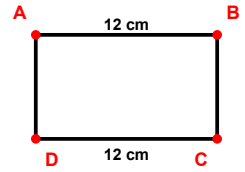
$$|BC| + |CD| = \dots$$



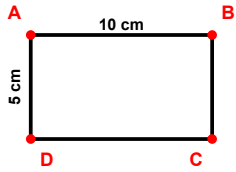
$$|CD| + |AB| = \dots$$



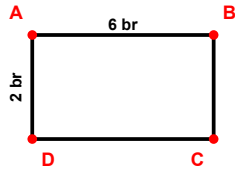
$$|AB| + |BC| = \dots$$



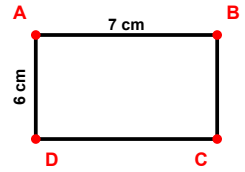
$$|AB| + |CD| = \dots$$



$$|AB| + |DA| = \dots$$

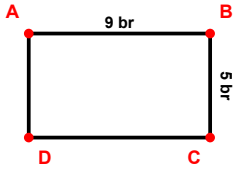


$$|AB| + |DA| = \dots$$

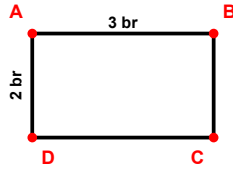


$$|AB| + |DA| = \dots$$

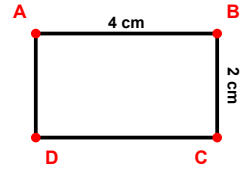
SORU: Aşağıdaki şekillerde verilen kenar uzunluklarının toplamını bulunuz.



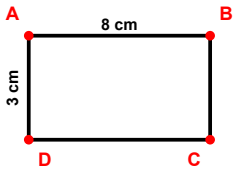
$$|BC| + |AB| = \dots$$



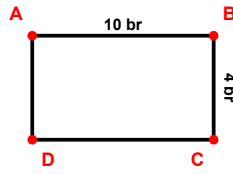
$$|AB| + |DA| = \dots$$



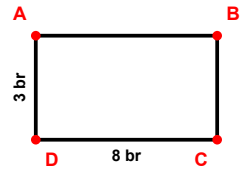
$$|AB| + |BC| = \dots$$



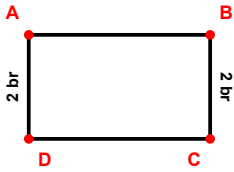
$$|AB| + |DA| = \dots$$



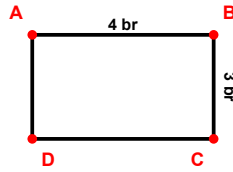
$$|AB| + |BC| = \dots$$



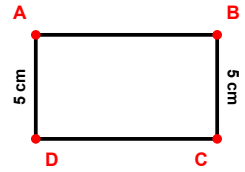
$$|CD| + |DA| = \dots$$



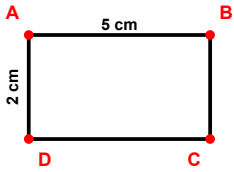
$$|DA| + |BC| = \dots$$



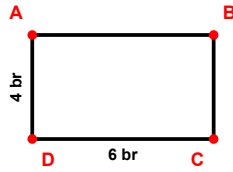
$$|AB| + |BC| = \dots$$



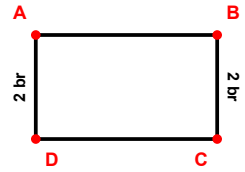
$$|DA| + |BC| = \dots$$



$$|DA| + |AB| = \dots$$

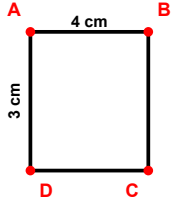


$$|CD| + |DA| = \dots$$

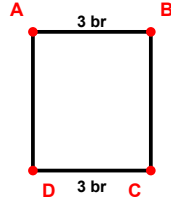


$$|BC| + |DA| = \dots$$

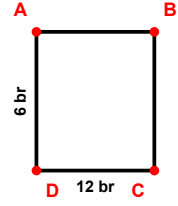
SORU: Aşağıdaki şekillerde verilen kenar uzunluklarının toplamını bulunuz.



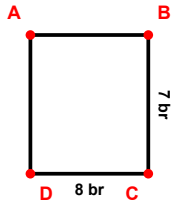
$$|AB| + |DA| = \dots$$



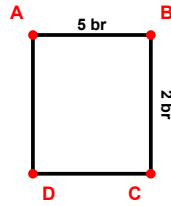
$$|AB| + |CD| = \dots$$



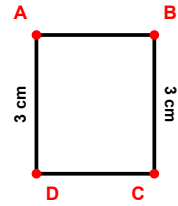
$$|CD| + |DA| = \dots$$



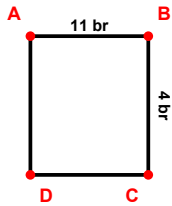
$$|CD| + |BC| = \dots$$



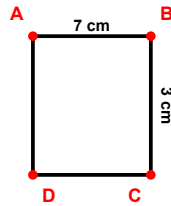
$$|AB| + |BC| = \dots$$



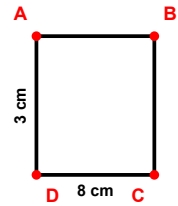
$$|DA| + |BC| = \dots$$



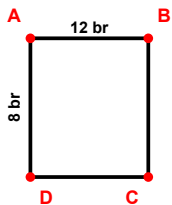
$$|BC| + |AB| = \dots$$



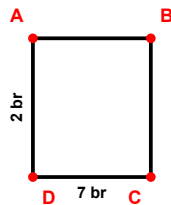
$$|AB| + |BC| = \dots$$



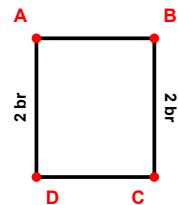
$$|DA| + |CD| = \dots$$



$$|DA| + |AB| = \dots$$

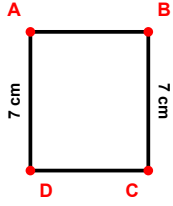


$$|DA| + |CD| = \dots$$

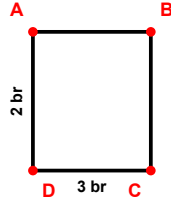


$$|BC| + |DA| = \dots$$

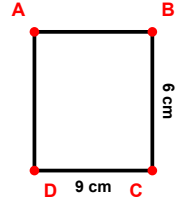
SORU: Aşağıdaki şekillerde verilen kenar uzunluklarının toplamını bulunuz.



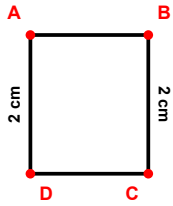
$$|BC| + |DA| = \dots$$



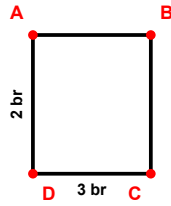
$$|DA| + |CD| = \dots$$



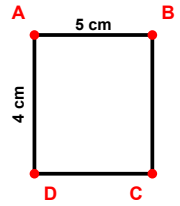
$$|CD| + |BC| = \dots$$



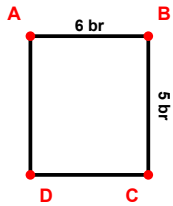
$$|DA| + |BC| = \dots$$



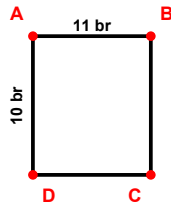
$$|DA| + |CD| = \dots$$



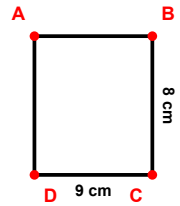
$$|DA| + |AB| = \dots$$



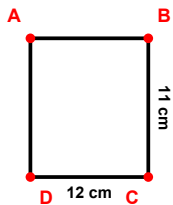
$$|BC| + |AB| = \dots$$



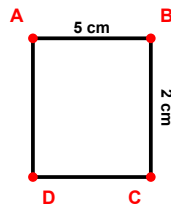
$$|AB| + |DA| = \dots$$



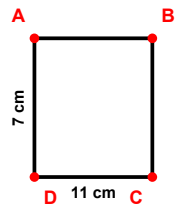
$$|BC| + |CD| = \dots$$



$$|BC| + |CD| = \dots$$

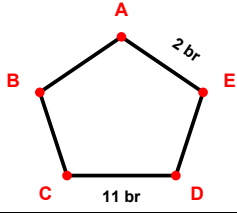


$$|AB| + |BC| = \dots$$

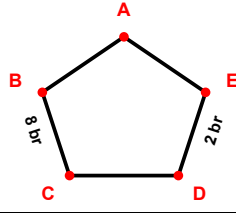


$$|CD| + |DA| = \dots$$

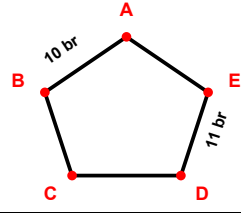
SORU: Aşağıdaki şekillerde verilen kenar uzunluklarının toplamını bulunuz.



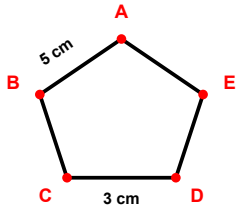
$$|CD| + |EA| = \dots$$



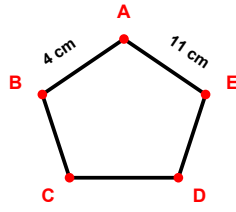
$$|DE| + |BC| = \dots$$



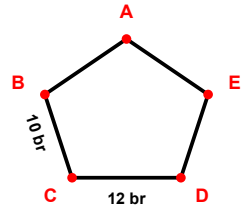
$$|DE| + |AB| = \dots$$



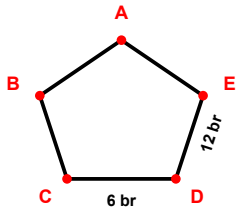
$$|AB| + |CD| = \dots$$



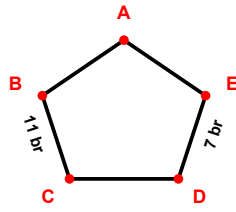
$$|AB| + |EA| = \dots$$



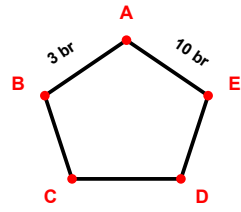
$$|BC| + |CD| = \dots$$



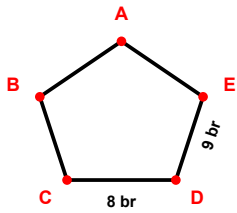
$$|DE| + |CD| = \dots$$



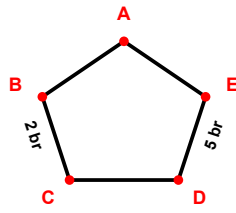
$$|DE| + |BC| = \dots$$



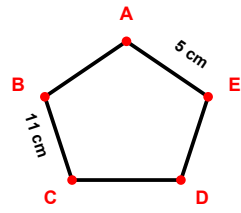
$$|AB| + |EA| = \dots$$



$$|DE| + |CD| = \dots$$

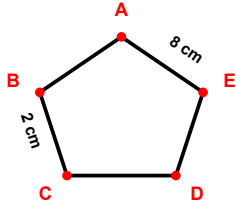


$$|DE| + |BC| = \dots$$

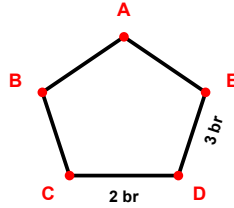


$$|BC| + |EA| = \dots$$

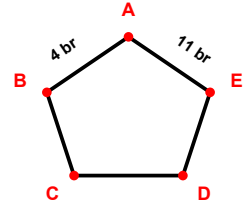
SORU: Aşağıdaki şekillerde verilen kenar uzunluklarının toplamını bulunuz.



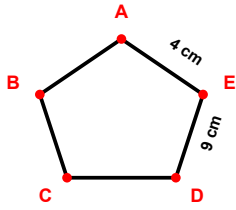
$$|EA| + |BC| = \dots$$



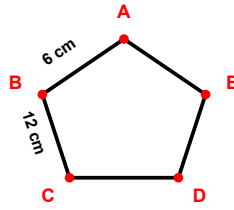
$$|DE| + |CD| = \dots$$



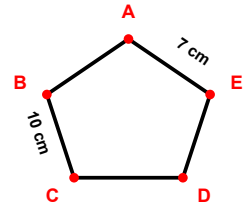
$$|EA| + |AB| = \dots$$



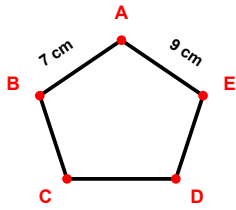
$$|EA| + |DE| = \dots$$



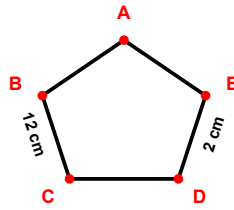
$$|BC| + |AB| = \dots$$



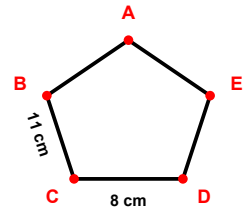
$$|EA| + |BC| = \dots$$



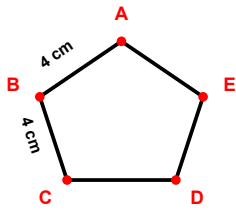
$$|EA| + |AB| = \dots$$



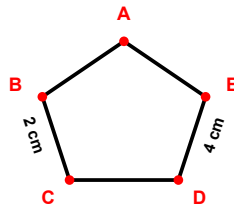
$$|BC| + |DE| = \dots$$



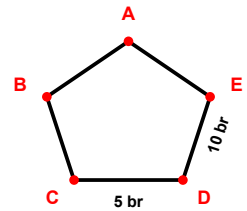
$$|CD| + |BC| = \dots$$



$$|BC| + |AB| = \dots$$

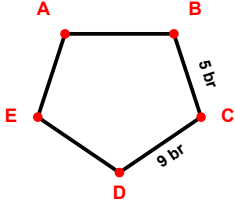


$$|BC| + |DE| = \dots$$

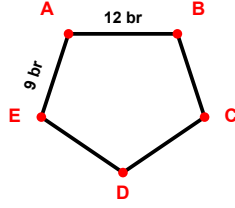


$$|DE| + |CD| = \dots$$

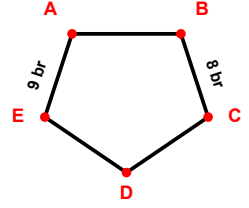
SORU: Aşağıdaki şekillerde verilen kenar uzunluklarının toplamını bulunuz.



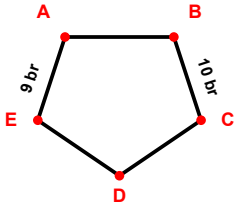
$$|CD| + |BC| = \dots$$



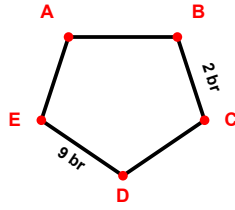
$$|EA| + |AB| = \dots$$



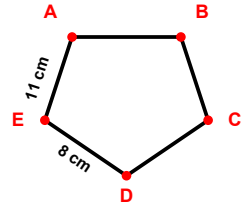
$$|BC| + |EA| = \dots$$



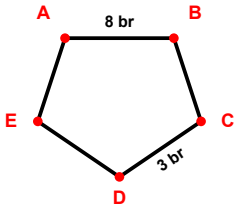
$$|BC| + |EA| = \dots$$



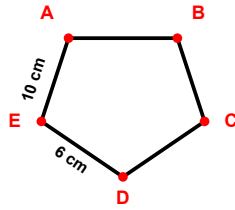
$$|BC| + |DE| = \dots$$



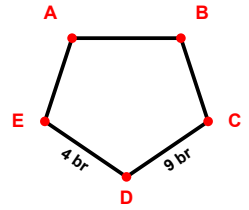
$$|DE| + |EA| = \dots$$



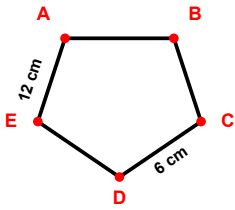
$$|CD| + |AB| = \dots$$



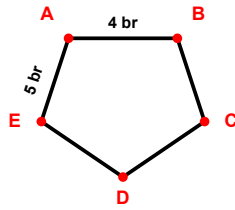
$$|EA| + |DE| = \dots$$



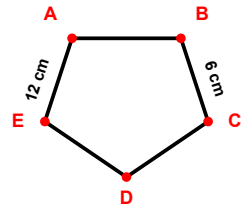
$$|CD| + |DE| = \dots$$



$$|CD| + |EA| = \dots$$

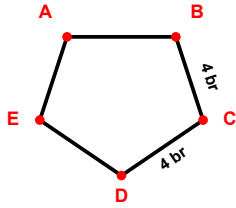


$$|EA| + |AB| = \dots$$

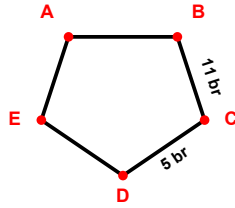


$$|BC| + |EA| = \dots$$

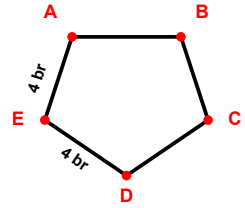
SORU: Aşağıdaki şekillerde verilen kenar uzunluklarının toplamını bulunuz.



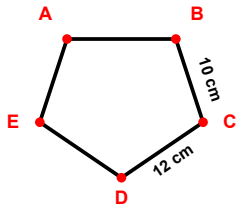
$$|BC| + |CD| = \dots$$



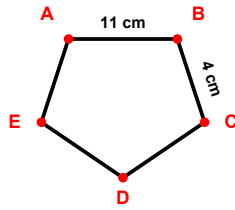
$$|BC| + |CD| = \dots$$



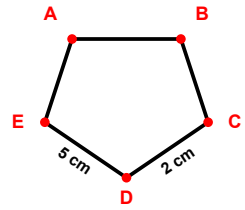
$$|DE| + |EA| = \dots$$



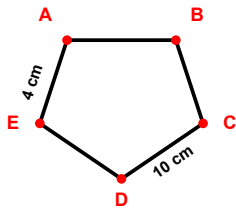
$$|CD| + |BC| = \dots$$



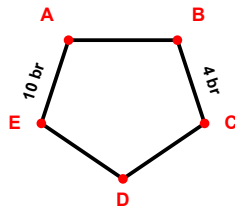
$$|AB| + |BC| = \dots$$



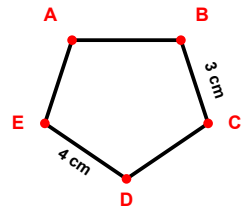
$$|CD| + |DE| = \dots$$



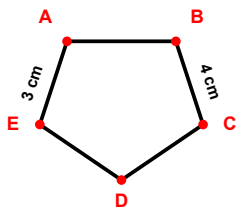
$$|CD| + |EA| = \dots$$



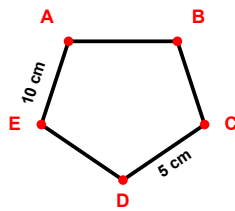
$$|EA| + |BC| = \dots$$



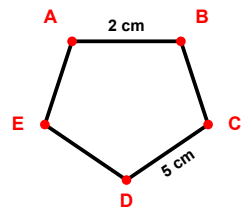
$$|DE| + |BC| = \dots$$



$$|BC| + |EA| = \dots$$

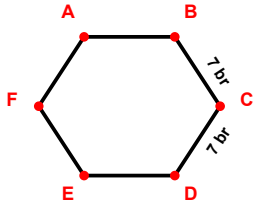


$$|CD| + |EA| = \dots$$

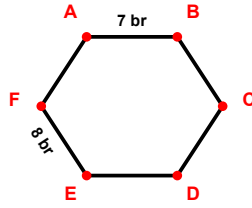


$$|CD| + |AB| = \dots$$

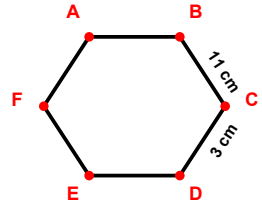
SORU: Aşağıdaki şekillerde verilen kenar uzunluklarının toplamını bulunuz.



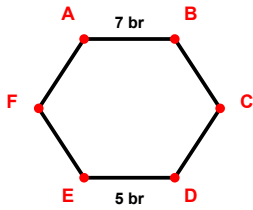
$$|BC| + |CD| = \dots$$



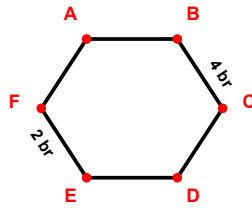
$$|EF| + |AB| = \dots$$



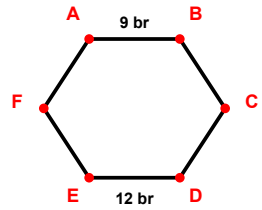
$$|BC| + |CD| = \dots$$



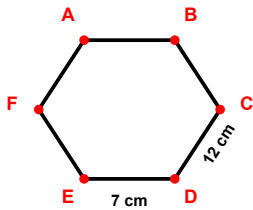
$$|DE| + |AB| = \dots$$



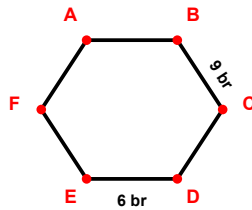
$$|EF| + |BC| = \dots$$



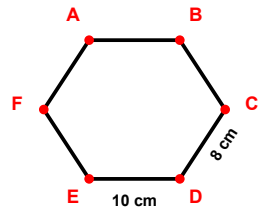
$$|DE| + |AB| = \dots$$



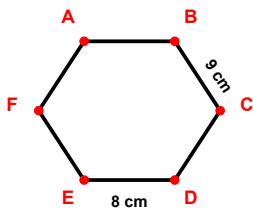
$$|CD| + |DE| = \dots$$



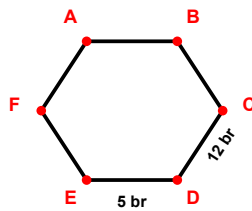
$$|BC| + |DE| = \dots$$



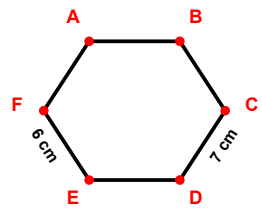
$$|CD| + |DE| = \dots$$



$$|DE| + |BC| = \dots$$

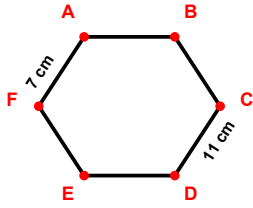


$$|DE| + |CD| = \dots$$

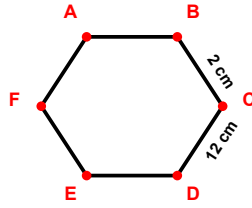


$$|CD| + |EF| = \dots$$

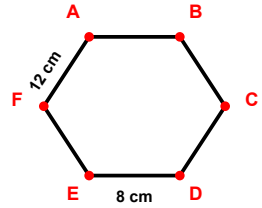
SORU: Aşağıdaki şekillerde verilen kenar uzunluklarının toplamını bulunuz.



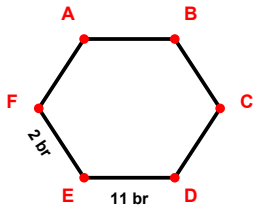
$$|FA| + |CD| = \dots$$



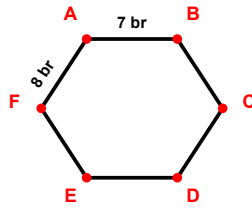
$$|BC| + |CD| = \dots$$



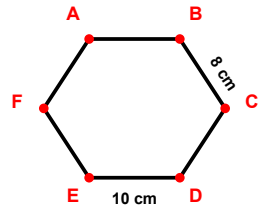
$$|FA| + |DE| = \dots$$



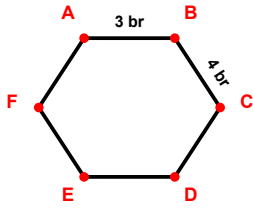
$$|EF| + |DE| = \dots$$



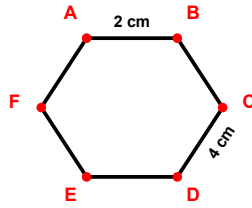
$$|FA| + |AB| = \dots$$



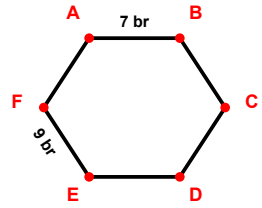
$$|BC| + |DE| = \dots$$



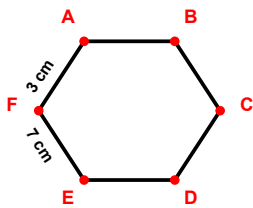
$$|AB| + |BC| = \dots$$



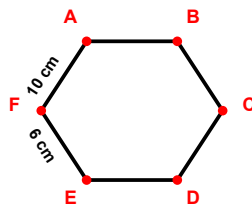
$$|AB| + |CD| = \dots$$



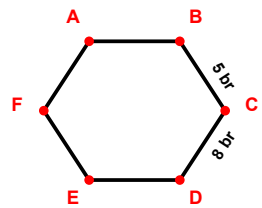
$$|EF| + |AB| = \dots$$



$$|EF| + |FA| = \dots$$

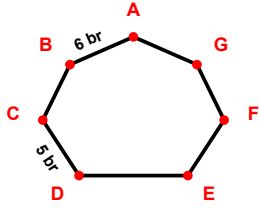


$$|EF| + |FA| = \dots$$

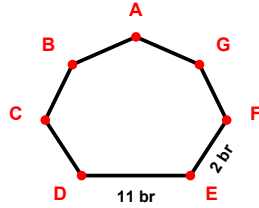


$$|CD| + |BC| = \dots$$

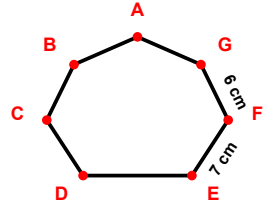
SORU: Aşağıdaki şekillerde verilen kenar uzunluklarının toplamını bulunuz.



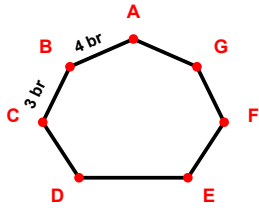
$$|AB| + |CD| = \dots$$



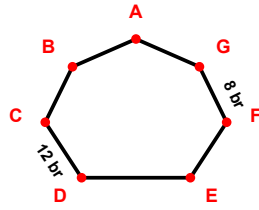
$$|DE| + |EF| = \dots$$



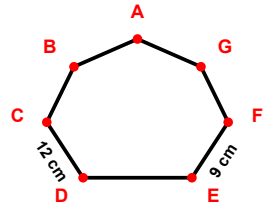
$$|EF| + |FG| = \dots$$



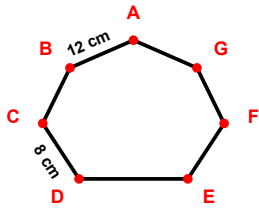
$$|BC| + |AB| = \dots$$



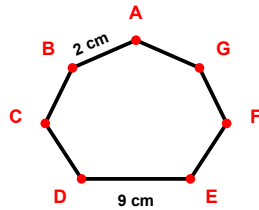
$$|CD| + |FG| = \dots$$



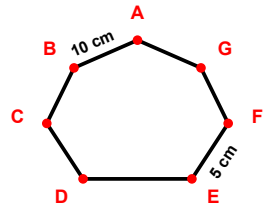
$$|CD| + |EF| = \dots$$



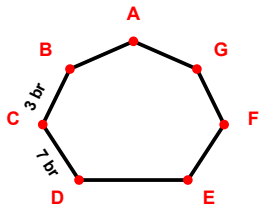
$$|CD| + |AB| = \dots$$



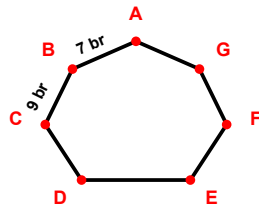
$$|DE| + |AB| = \dots$$



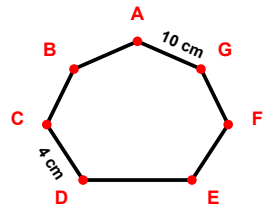
$$|EF| + |AB| = \dots$$



$$|CD| + |BC| = \dots$$

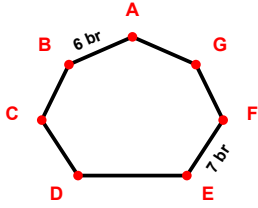


$$|BC| + |AB| = \dots$$

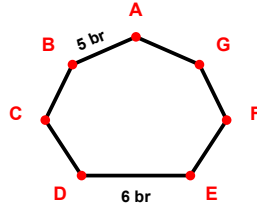


$$|CD| + |GA| = \dots$$

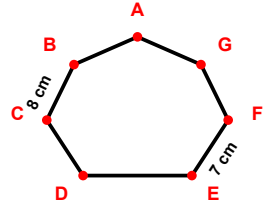
SORU: Aşağıdaki şekillerde verilen kenar uzunluklarının toplamını bulunuz.



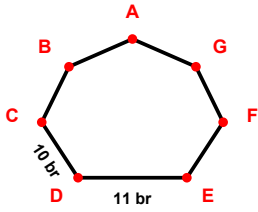
$$|AB| + |EF| = \dots$$



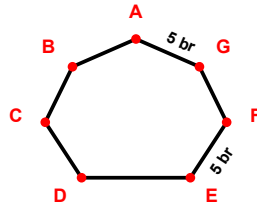
$$|DE| + |AB| = \dots$$



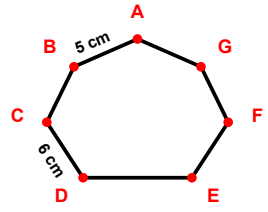
$$|BC| + |EF| = \dots$$



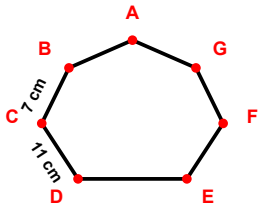
$$|CD| + |DE| = \dots$$



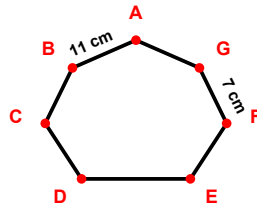
$$|GA| + |EF| = \dots$$



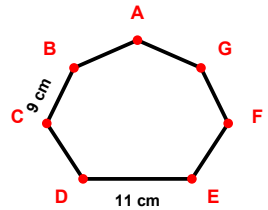
$$|AB| + |CD| = \dots$$



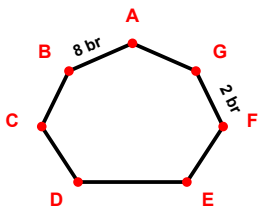
$$|BC| + |CD| = \dots$$



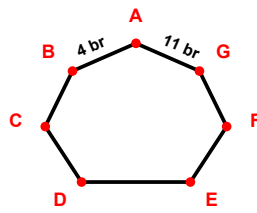
$$|AB| + |FG| = \dots$$



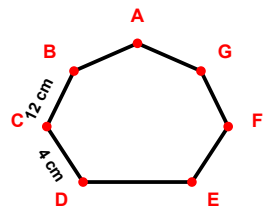
$$|DE| + |BC| = \dots$$



$$|AB| + |FG| = \dots$$

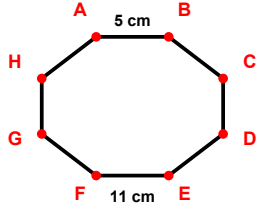


$$|AB| + |GA| = \dots$$

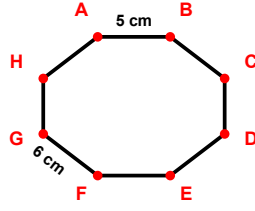


$$|BC| + |CD| = \dots$$

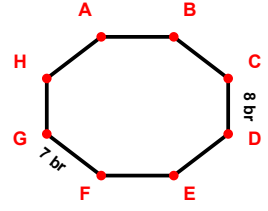
SORU: Aşağıdaki şekillerde verilen kenar uzunluklarının toplamını bulunuz.



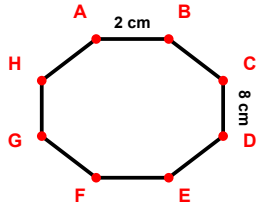
$$|AB| + |EF| = \dots$$



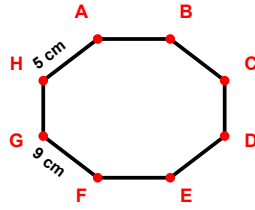
$$|FG| + |AB| = \dots$$



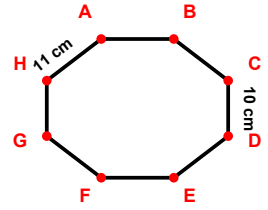
$$|CD| + |FG| = \dots$$



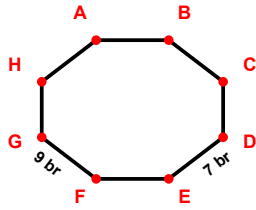
$$|AB| + |CD| = \dots$$



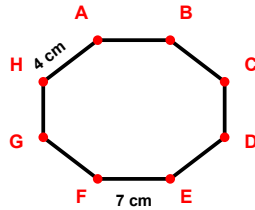
$$|HA| + |FG| = \dots$$



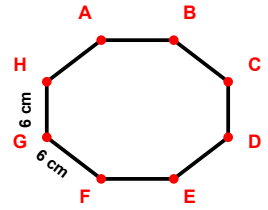
$$|CD| + |HA| = \dots$$



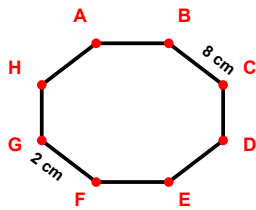
$$|DE| + |FG| = \dots$$



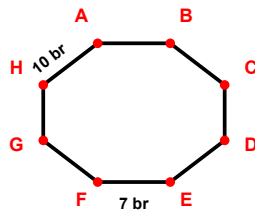
$$|EF| + |HA| = \dots$$



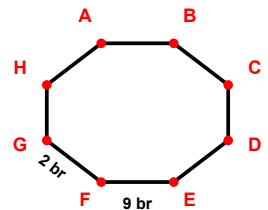
$$|GH| + |FG| = \dots$$



$$|FG| + |BC| = \dots$$

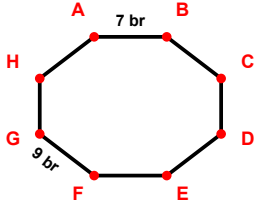


$$|HA| + |EF| = \dots$$

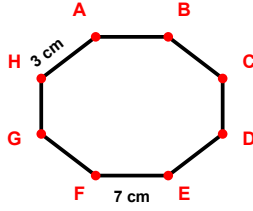


$$|FG| + |EF| = \dots$$

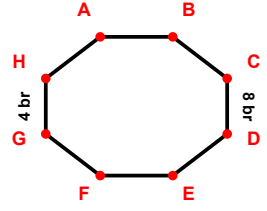
SORU: Aşağıdaki şekillerde verilen kenar uzunluklarının toplamını bulunuz.



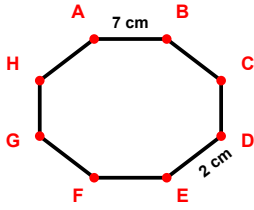
$$|AB| + |FG| = \dots$$



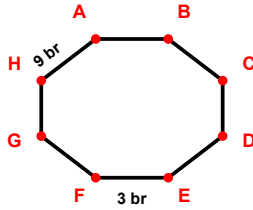
$$|EF| + |HA| = \dots$$



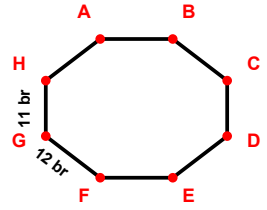
$$|GH| + |CD| = \dots$$



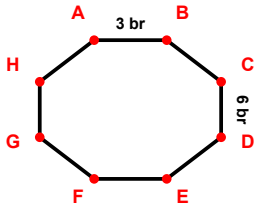
$$|DE| + |AB| = \dots$$



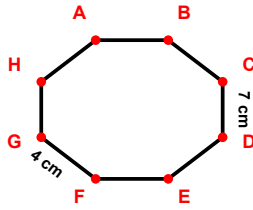
$$|EF| + |HA| = \dots$$



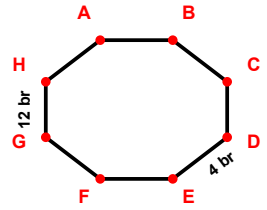
$$|FG| + |GH| = \dots$$



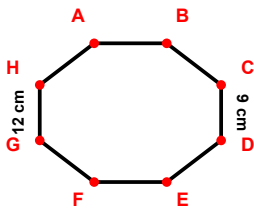
$$|CD| + |AB| = \dots$$



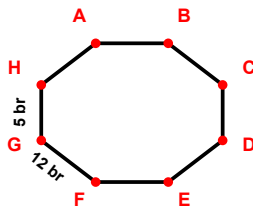
$$|CD| + |FG| = \dots$$



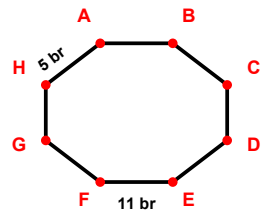
$$|GH| + |DE| = \dots$$



$$|CD| + |GH| = \dots$$

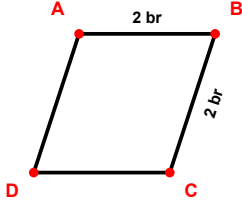


$$|FG| + |GH| = \dots$$

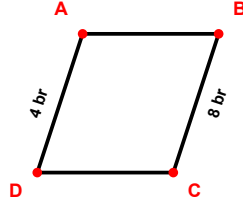


$$|HA| + |EF| = \dots$$

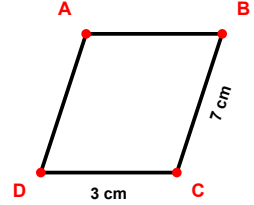
SORU: Aşağıdaki şekillerde verilen kenar uzunluklarının toplamını bulunuz.



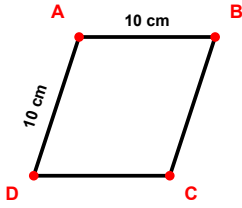
$$|AB| + |BC| = \dots$$



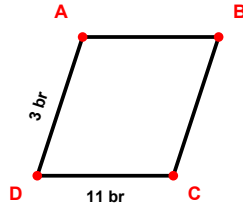
$$|BC| + |DA| = \dots$$



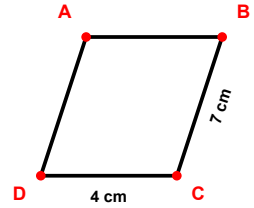
$$|CD| + |BC| = \dots$$



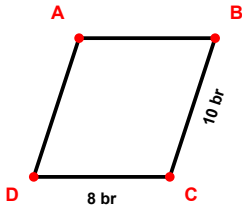
$$|DA| + |AB| = \dots$$



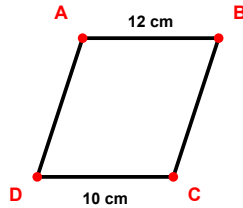
$$|DA| + |CD| = \dots$$



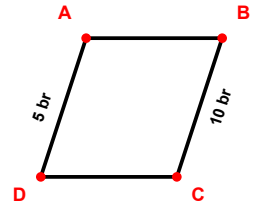
$$|BC| + |CD| = \dots$$



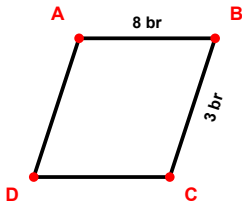
$$|BC| + |CD| = \dots$$



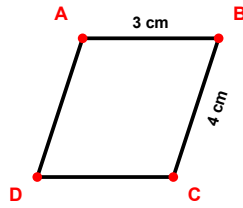
$$|CD| + |AB| = \dots$$



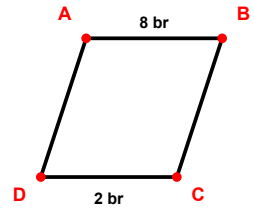
$$|DA| + |BC| = \dots$$



$$|AB| + |BC| = \dots$$

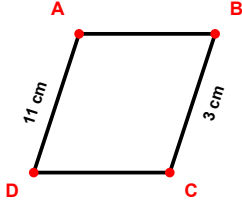


$$|AB| + |BC| = \dots$$

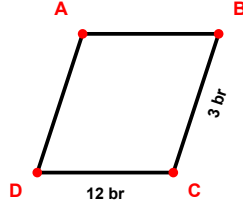


$$|CD| + |AB| = \dots$$

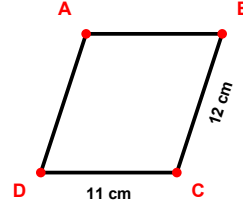
SORU: Aşağıdaki şekillerde verilen kenar uzunluklarının toplamını bulunuz.



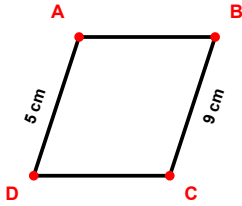
$$|DA| + |BC| = \dots$$



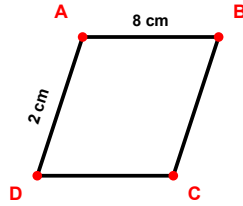
$$|BC| + |CD| = \dots$$



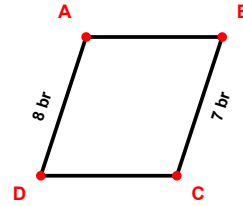
$$|CD| + |BC| = \dots$$



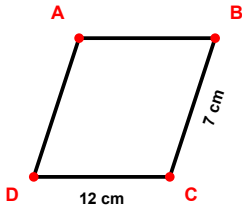
$$|DA| + |BC| = \dots$$



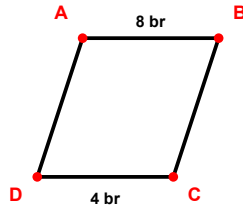
$$|DA| + |AB| = \dots$$



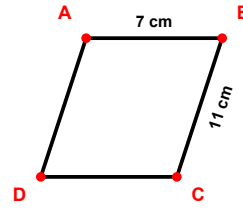
$$|DA| + |BC| = \dots$$



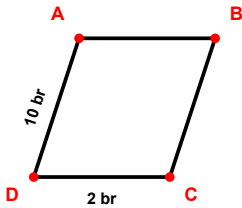
$$|CD| + |BC| = \dots$$



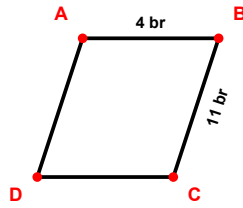
$$|AB| + |CD| = \dots$$



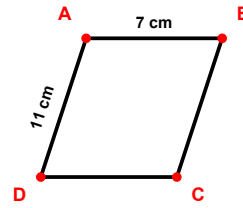
$$|AB| + |BC| = \dots$$



$$|CD| + |DA| = \dots$$

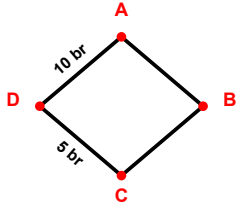


$$|BC| + |AB| = \dots$$

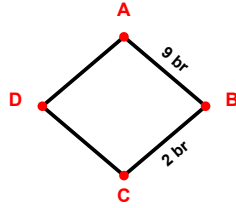


$$|DA| + |AB| = \dots$$

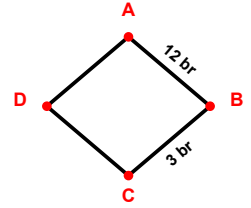
SORU: Aşağıdaki şekillerde verilen kenar uzunluklarının toplamını bulunuz.



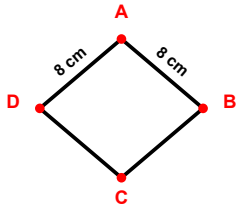
$$|DA| + |CD| = \dots$$



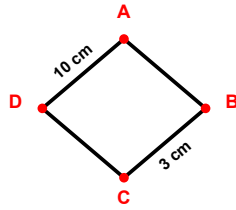
$$|BC| + |AB| = \dots$$



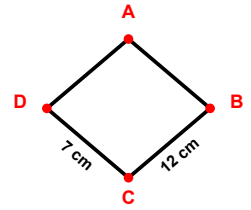
$$|AB| + |BC| = \dots$$



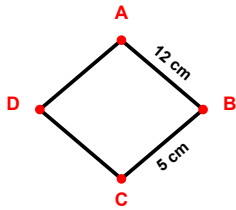
$$|AB| + |DA| = \dots$$



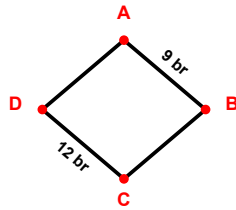
$$|BC| + |DA| = \dots$$



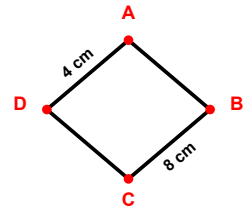
$$|CD| + |BC| = \dots$$



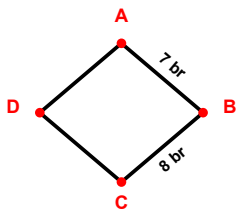
$$|AB| + |BC| = \dots$$



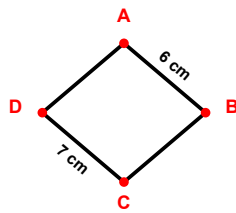
$$|CD| + |AB| = \dots$$



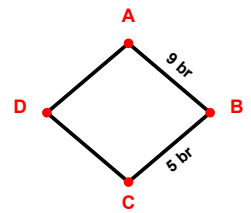
$$|BC| + |DA| = \dots$$



$$|AB| + |BC| = \dots$$

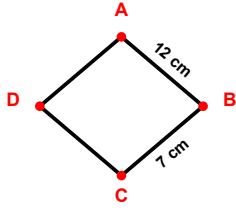


$$|CD| + |AB| = \dots$$

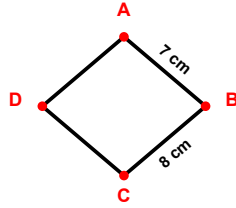


$$|AB| + |BC| = \dots$$

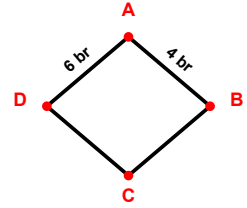
SORU: Aşağıdaki şekillerde verilen kenar uzunluklarının toplamını bulunuz.



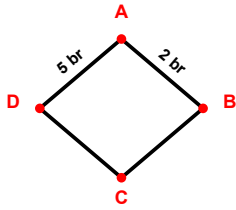
$$|AB| + |BC| = \dots$$



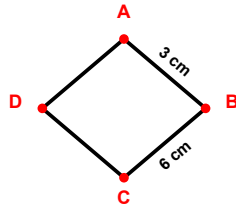
$$|AB| + |BC| = \dots$$



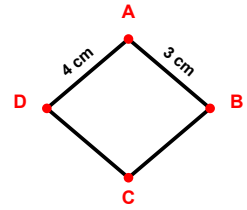
$$|DA| + |AB| = \dots$$



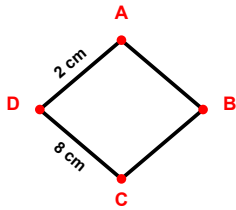
$$|AB| + |DA| = \dots$$



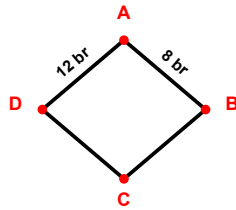
$$|AB| + |BC| = \dots$$



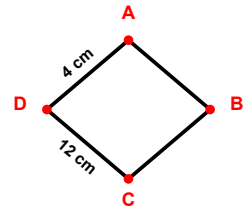
$$|AB| + |DA| = \dots$$



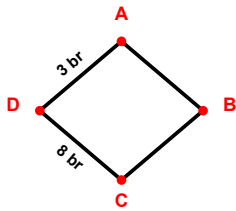
$$|DA| + |CD| = \dots$$



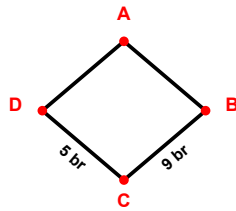
$$|AB| + |DA| = \dots$$



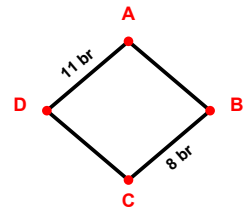
$$|DA| + |CD| = \dots$$



$$|CD| + |DA| = \dots$$

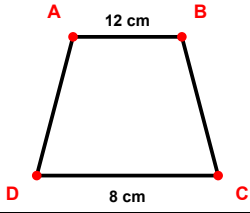


$$|BC| + |CD| = \dots$$

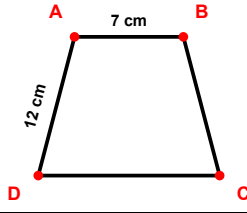


$$|BC| + |DA| = \dots$$

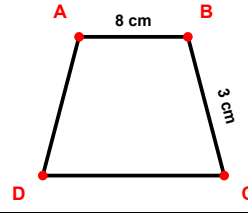
SORU: Aşağıdaki şekillerde verilen kenar uzunluklarının toplamını bulunuz.



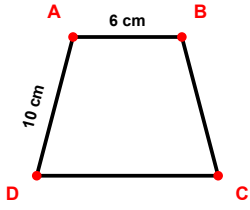
$$|AB| + |CD| = \dots$$



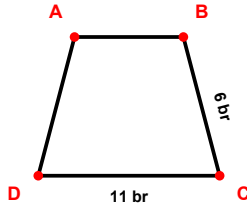
$$|DA| + |AB| = \dots$$



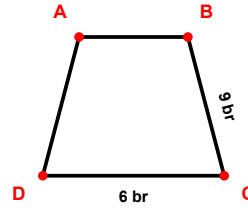
$$|AB| + |BC| = \dots$$



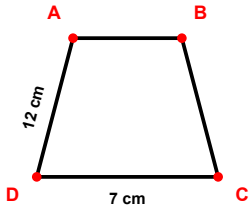
$$|AB| + |DA| = \dots$$



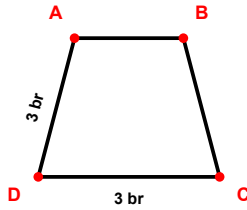
$$|CD| + |BC| = \dots$$



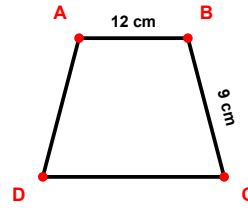
$$|CD| + |BC| = \dots$$



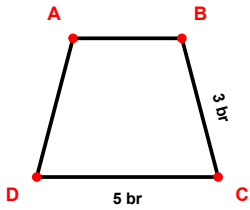
$$|DA| + |CD| = \dots$$



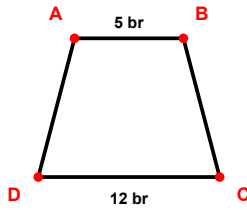
$$|CD| + |DA| = \dots$$



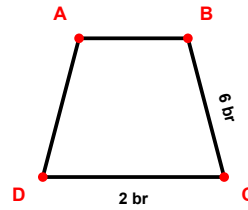
$$|BC| + |AB| = \dots$$



$$|CD| + |BC| = \dots$$

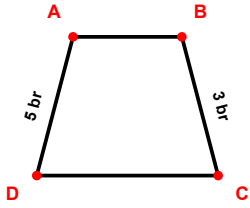


$$|AB| + |CD| = \dots$$

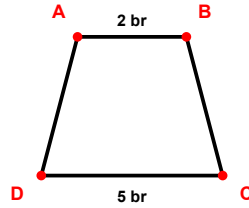


$$|BC| + |CD| = \dots$$

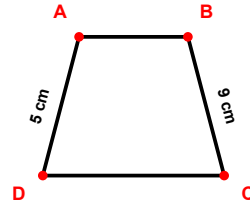
SORU: Aşağıdaki şekillerde verilen kenar uzunluklarının toplamını bulunuz.



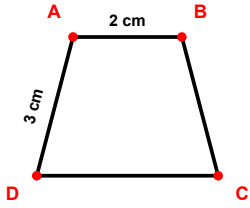
$$|BC| + |DA| = \dots$$



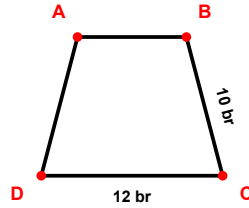
$$|CD| + |AB| = \dots$$



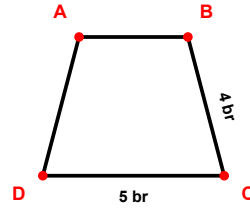
$$|DA| + |BC| = \dots$$



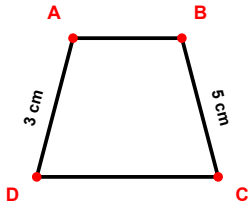
$$|DA| + |AB| = \dots$$



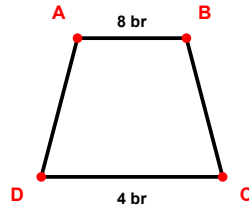
$$|CD| + |BC| = \dots$$



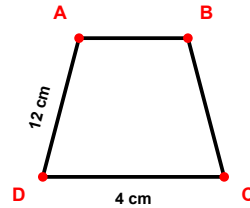
$$|CD| + |BC| = \dots$$



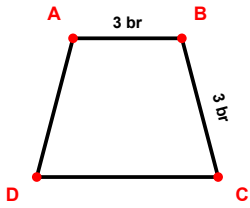
$$|DA| + |BC| = \dots$$



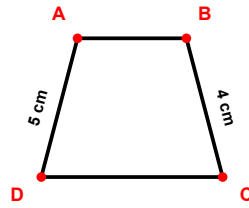
$$|CD| + |AB| = \dots$$



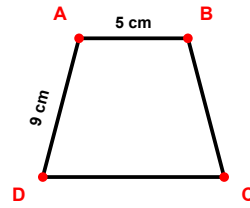
$$|CD| + |DA| = \dots$$



$$|BC| + |AB| = \dots$$

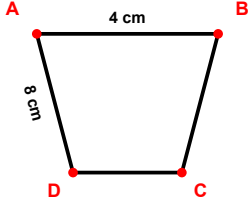


$$|BC| + |DA| = \dots$$

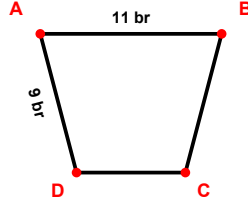


$$|DA| + |AB| = \dots$$

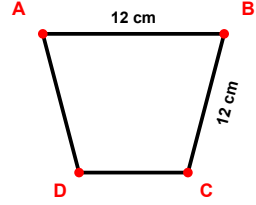
SORU: Aşağıdaki şekillerde verilen kenar uzunluklarının toplamını bulunuz.



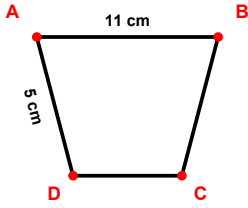
$$|AB| + |DA| = \dots$$



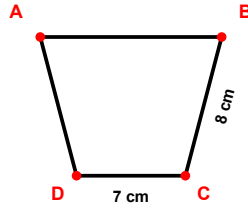
$$|AB| + |DA| = \dots$$



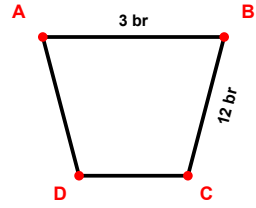
$$|BC| + |AB| = \dots$$



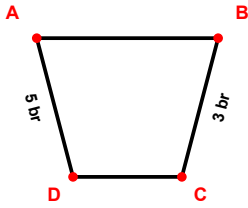
$$|AB| + |DA| = \dots$$



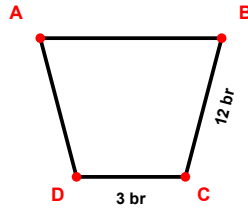
$$|BC| + |CD| = \dots$$



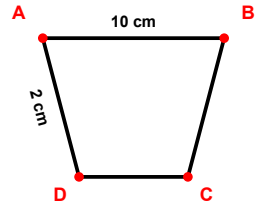
$$|BC| + |AB| = \dots$$



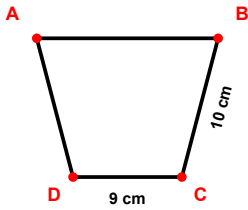
$$|BC| + |DA| = \dots$$



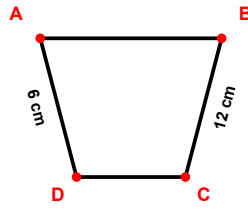
$$|CD| + |BC| = \dots$$



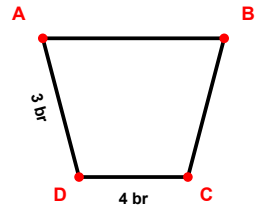
$$|AB| + |DA| = \dots$$



$$|BC| + |CD| = \dots$$

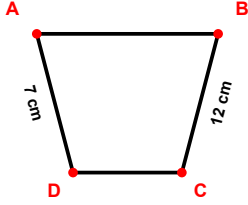


$$|BC| + |DA| = \dots$$

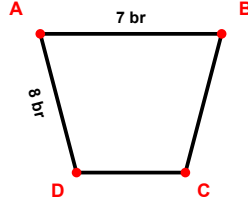


$$|DA| + |CD| = \dots$$

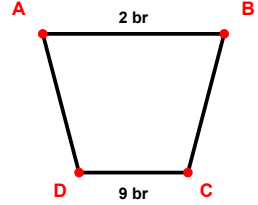
SORU: Aşağıdaki şekillerde verilen kenar uzunluklarının toplamını bulunuz.



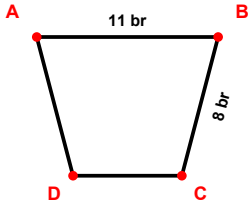
$$|DA| + |BC| = \dots$$



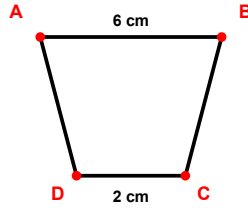
$$|DA| + |AB| = \dots$$



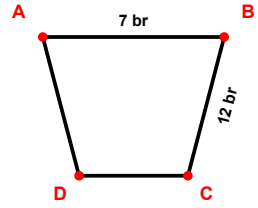
$$|CD| + |AB| = \dots$$



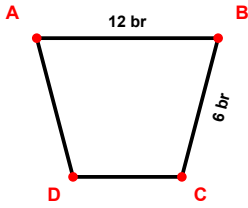
$$|AB| + |BC| = \dots$$



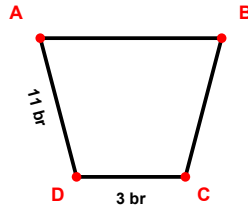
$$|AB| + |CD| = \dots$$



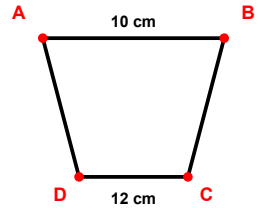
$$|BC| + |AB| = \dots$$



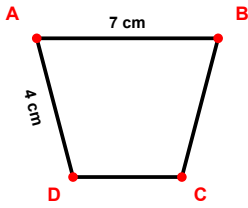
$$|BC| + |AB| = \dots$$



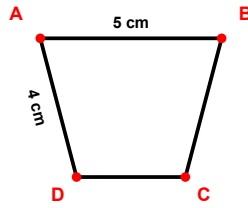
$$|CD| + |DA| = \dots$$



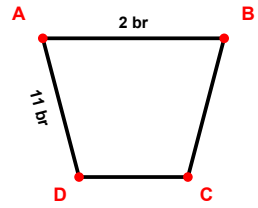
$$|CD| + |AB| = \dots$$



$$|AB| + |DA| = \dots$$



$$|DA| + |AB| = \dots$$



$$|DA| + |AB| = \dots$$

SÜREÇ ODAKLI DEĞERLENDİRME ÖLÇEĞİ

Geliştirilmeli (0-109)	İyi (110-187)	Çok İyi (188-265)	Mükemmel (266-312)
<input type="checkbox"/>	<input type="checkbox"/>	<input type="checkbox"/>	<input type="checkbox"/>

Hazırlayan:

Bu bölüme sınıfınızın ilgili kazanıma yönelik genel durumuna ilişkin gözlem ve izlenimlerinizi, öğrencilerinizin bu kazanımla ilgili öğrenme eksikliklerini ve bu eksikliklerin giderilmesi amacıyla yaptığınız/yapmayı planladığınız faaliyetleri not edebilirsiniz.

No	Adı - Soyadı	Toplam Puan	Değerlendirme
1			
2			
3			
4			
5			
6			
7			
8			
9			
10			
11			
12			
13			
14			
15			
16			
17			
18			
19			
20			
21			
22			
23			
24			
25			
26			
27			
28			
29			
30			
31			
32			
33			
34			
35			

Hazırlayan: